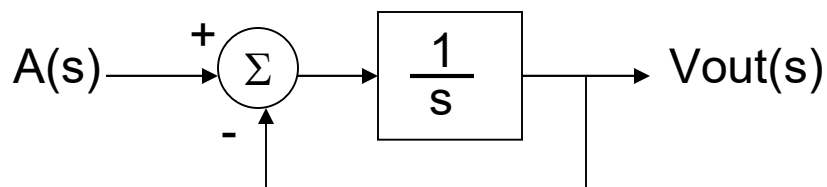
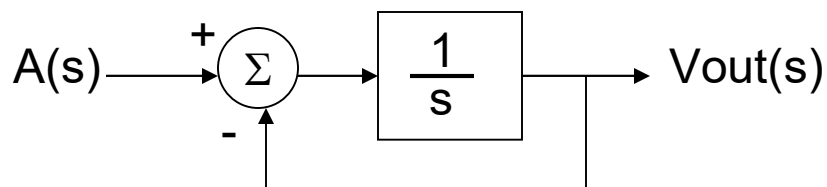


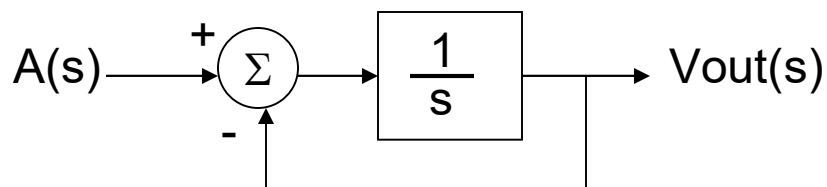
- 1) You decide to attend a rock concert without earplugs. You sit where the sound power level is 109 dB. How long until you have permanent hearing loss?
- 2) At the rock concert in (1), you decide to sit in the back where the sound power level is only 103 dB. How long until you have permanent hearing loss?
- 3) A doubled clamped spring style accelerometer consists of a Si proof mass (500 $\mu\text{m}$  thick and 1mm by 1mm) and a suspension system (2 rectangular beams, one on one side and one on the other side of the PM, 100 $\mu\text{m}$  long, 10 $\mu\text{m}$  wide and 5 $\mu\text{m}$  thick). For a Young's modulus of 190GPa and a density of 2.3g/cm<sup>3</sup>, what is the sensitivity of the accelerometer?
- 4) For an accelerometer with a natural frequency of 1000Hz, what is the proof mass / frame relative displacement for a 10 G acceleration (1G = 9.8 m/s<sup>2</sup>)?
- 5) What is the natural frequency (in Hz) for an accelerometer where a 10 G acceleration (1G = 9.8 m/s<sup>2</sup>) results in a proof mass / frame relative displacement of 10 $\mu\text{m}$ ?
- 6) For  $a(t) = 2u(t)$ , what is  $V_{out}(t)$ ?



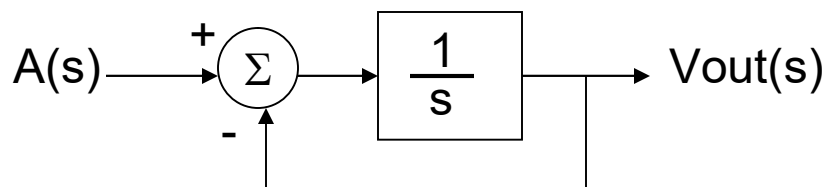
- 1) You decide to attend a rock concert without earplugs. You sit where the sound power level is 109 dB. How long until you have permanent hearing loss?
- 2) At the rock concert in (1), you decide to sit in the back where the sound power level is only 103 dB. How long until you have permanent hearing loss?
- 3) A doubled clamped spring style accelerometer consists of a Si proof mass (500 $\mu\text{m}$  thick and 1mm by 1mm) and a suspension system (2 rectangular beams, one on one side and one on the other side of the PM, 100 $\mu\text{m}$  long, 10 $\mu\text{m}$  wide and 5 $\mu\text{m}$  thick). For a Young's modulus of 190GPa and a density of 2.3g/cm<sup>3</sup>, what is the sensitivity of the accelerometer?
- 4) For an accelerometer with a natural frequency of 1000Hz, what is the proof mass / frame relative displacement for a 10 G acceleration (1G = 9.8 m/s<sup>2</sup>)?
- 5) What is the natural frequency (in Hz) for an accelerometer where a 10 G acceleration (1G = 9.8 m/s<sup>2</sup>) results in a proof mass / frame relative displacement of 10 $\mu\text{m}$ ?
- 6) For  $a(t) = 2u(t)$ , what is  $V_{out}(t)$ ?



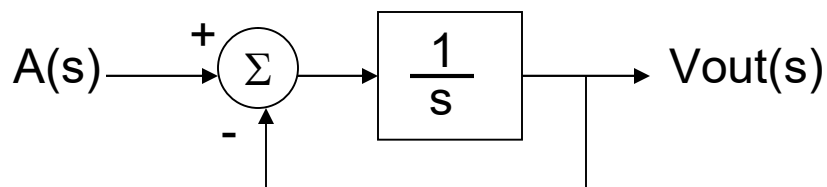
- 1) You decide to attend a rock concert without earplugs. You sit where the sound power level is 109 dB. How long until you have permanent hearing loss?
- 2) At the rock concert in (1), you decide to sit in the back where the sound power level is only 103 dB. How long until you have permanent hearing loss?
- 3) A doubled clamped spring style accelerometer consists of a Si proof mass (500 $\mu$ m thick and 1mm by 1mm) and a suspension system (2 rectangular beams, one on one side and one on the other side of the PM, 100 $\mu$ m long, 10 $\mu$ m wide and 5 $\mu$ m thick). For a Young's modulus of 190GPa and a density of 2.3g/cm<sup>3</sup>, what is the sensitivity of the accelerometer?
- 4) For an accelerometer with a natural frequency of 1000Hz, what is the proof mass / frame relative displacement for a 10 G acceleration (1G = 9.8 m/s<sup>2</sup>)?
- 5) What is the natural frequency (in Hz) for an accelerometer where a 10 G acceleration (1G = 9.8 m/s<sup>2</sup>) results in a proof mass / frame relative displacement of 10 $\mu$ m?
- 6) For  $a(t) = 2u(t)$ , what is  $V_{out}(t)$ ?



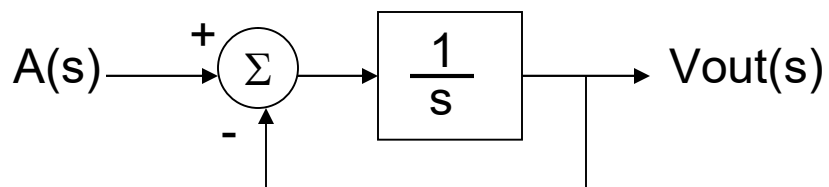
- 1) You decide to attend a rock concert without earplugs. You sit where the sound power level is 109 dB. How long until you have permanent hearing loss?
- 2) At the rock concert in (1), you decide to sit in the back where the sound power level is only 103 dB. How long until you have permanent hearing loss?
- 3) A doubled clamped spring style accelerometer consists of a Si proof mass (500 $\mu\text{m}$  thick and 1mm by 1mm) and a suspension system (2 rectangular beams, one on one side and one on the other side of the PM, 100 $\mu\text{m}$  long, 10 $\mu\text{m}$  wide and 5 $\mu\text{m}$  thick). For a Young's modulus of 190GPa and a density of 2.3g/cm<sup>3</sup>, what is the sensitivity of the accelerometer?
- 4) For an accelerometer with a natural frequency of 1000Hz, what is the proof mass / frame relative displacement for a 10 G acceleration (1G = 9.8 m/s<sup>2</sup>)?
- 5) What is the natural frequency (in Hz) for an accelerometer where a 10 G acceleration (1G = 9.8 m/s<sup>2</sup>) results in a proof mass / frame relative displacement of 10 $\mu\text{m}$ ?
- 6) For  $a(t) = 2u(t)$ , what is  $V_{out}(t)$ ?



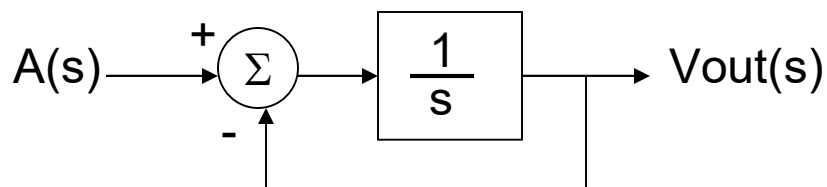
- 1) You decide to attend a rock concert without earplugs. You sit where the sound power level is 109 dB. How long until you have permanent hearing loss?
- 2) At the rock concert in (1), you decide to sit in the back where the sound power level is only 103 dB. How long until you have permanent hearing loss?
- 3) A doubled clamped spring style accelerometer consists of a Si proof mass (500 $\mu\text{m}$  thick and 1mm by 1mm) and a suspension system (2 rectangular beams, one on one side and one on the other side of the PM, 100 $\mu\text{m}$  long, 10 $\mu\text{m}$  wide and 5 $\mu\text{m}$  thick). For a Young's modulus of 190GPa and a density of 2.3g/cm<sup>3</sup>, what is the sensitivity of the accelerometer?
- 4) For an accelerometer with a natural frequency of 1000Hz, what is the proof mass / frame relative displacement for a 10 G acceleration (1G = 9.8 m/s<sup>2</sup>)?
- 5) What is the natural frequency (in Hz) for an accelerometer where a 10 G acceleration (1G = 9.8 m/s<sup>2</sup>) results in a proof mass / frame relative displacement of 10 $\mu\text{m}$ ?
- 6) For  $a(t) = 2u(t)$ , what is  $V_{out}(t)$ ?



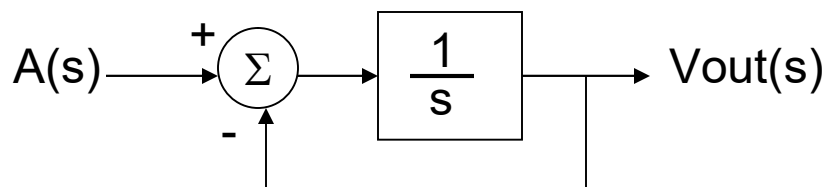
- 1) You decide to attend a rock concert without earplugs. You sit where the sound power level is 109 dB. How long until you have permanent hearing loss?
- 2) At the rock concert in (1), you decide to sit in the back where the sound power level is only 103 dB. How long until you have permanent hearing loss?
- 3) A doubled clamped spring style accelerometer consists of a Si proof mass (500 $\mu\text{m}$  thick and 1mm by 1mm) and a suspension system (2 rectangular beams, one on one side and one on the other side of the PM, 100 $\mu\text{m}$  long, 10 $\mu\text{m}$  wide and 5 $\mu\text{m}$  thick). For a Young's modulus of 190GPa and a density of 2.3g/cm<sup>3</sup>, what is the sensitivity of the accelerometer?
- 4) For an accelerometer with a natural frequency of 1000Hz, what is the proof mass / frame relative displacement for a 10 G acceleration (1G = 9.8 m/s<sup>2</sup>)?
- 5) What is the natural frequency (in Hz) for an accelerometer where a 10 G acceleration (1G = 9.8 m/s<sup>2</sup>) results in a proof mass / frame relative displacement of 10 $\mu\text{m}$ ?
- 6) For  $a(t) = 2u(t)$ , what is  $V_{out}(t)$ ?



- 1) You decide to attend a rock concert without earplugs. You sit where the sound power level is 109 dB. How long until you have permanent hearing loss?
- 2) At the rock concert in (1), you decide to sit in the back where the sound power level is only 103 dB. How long until you have permanent hearing loss?
- 3) A doubled clamped spring style accelerometer consists of a Si proof mass (500 $\mu\text{m}$  thick and 1mm by 1mm) and a suspension system (2 rectangular beams, one on one side and one on the other side of the PM, 100 $\mu\text{m}$  long, 10 $\mu\text{m}$  wide and 5 $\mu\text{m}$  thick). For a Young's modulus of 190GPa and a density of 2.3g/cm<sup>3</sup>, what is the sensitivity of the accelerometer?
- 4) For an accelerometer with a natural frequency of 1000Hz, what is the proof mass / frame relative displacement for a 10 G acceleration (1G = 9.8 m/s<sup>2</sup>)?
- 5) What is the natural frequency (in Hz) for an accelerometer where a 10 G acceleration (1G = 9.8 m/s<sup>2</sup>) results in a proof mass / frame relative displacement of 10 $\mu\text{m}$ ?
- 6) For  $a(t) = 2u(t)$ , what is  $V_{out}(t)$ ?

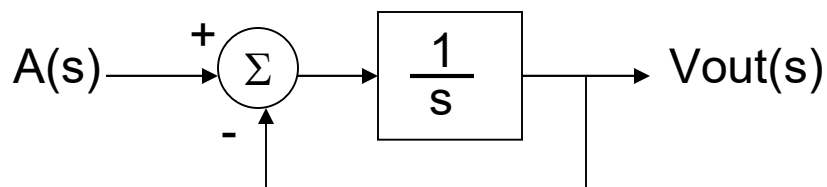


- 1) You decide to attend a rock concert without earplugs. You sit where the sound power level is 109 dB. How long until you have permanent hearing loss?
- 2) At the rock concert in (1), you decide to sit in the back where the sound power level is only 103 dB. How long until you have permanent hearing loss?
- 3) A doubled clamped spring style accelerometer consists of a Si proof mass (500 $\mu\text{m}$  thick and 1mm by 1mm) and a suspension system (2 rectangular beams, one on one side and one on the other side of the PM, 100 $\mu\text{m}$  long, 10 $\mu\text{m}$  wide and 5 $\mu\text{m}$  thick). For a Young's modulus of 190GPa and a density of 2.3g/cm<sup>3</sup>, what is the sensitivity of the accelerometer?
- 4) For an accelerometer with a natural frequency of 1000Hz, what is the proof mass / frame relative displacement for a 10 G acceleration (1G = 9.8 m/s<sup>2</sup>)?
- 5) What is the natural frequency (in Hz) for an accelerometer where a 10 G acceleration (1G = 9.8 m/s<sup>2</sup>) results in a proof mass / frame relative displacement of 10 $\mu\text{m}$ ?
- 6) For  $a(t) = 2u(t)$ , what is  $V_{out}(t)$ ?

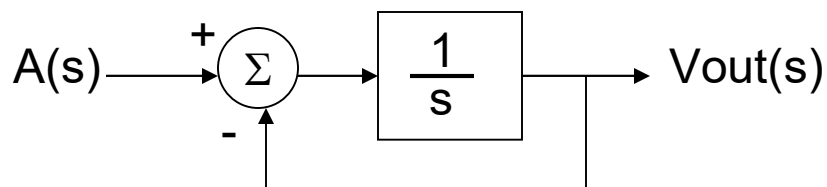




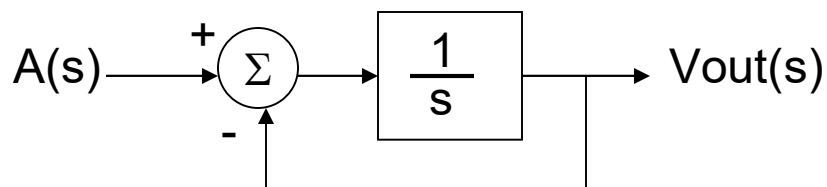
- 1) You decide to attend a rock concert without earplugs. You sit where the sound power level is 109 dB. How long until you have permanent hearing loss?
- 2) At the rock concert in (1), you decide to sit in the back where the sound power level is only 103 dB. How long until you have permanent hearing loss?
- 3) A doubled clamped spring style accelerometer consists of a Si proof mass (500 $\mu\text{m}$  thick and 1mm by 1mm) and a suspension system (2 rectangular beams, one on one side and one on the other side of the PM, 100 $\mu\text{m}$  long, 10 $\mu\text{m}$  wide and 5 $\mu\text{m}$  thick). For a Young's modulus of 190GPa and a density of 2.3g/cm<sup>3</sup>, what is the sensitivity of the accelerometer?
- 4) For an accelerometer with a natural frequency of 1000Hz, what is the proof mass / frame relative displacement for a 10 G acceleration (1G = 9.8 m/s<sup>2</sup>)?
- 5) What is the natural frequency (in Hz) for an accelerometer where a 10 G acceleration (1G = 9.8 m/s<sup>2</sup>) results in a proof mass / frame relative displacement of 10 $\mu\text{m}$ ?
- 6) For  $a(t) = 2u(t)$ , what is  $V_{out}(t)$ ?



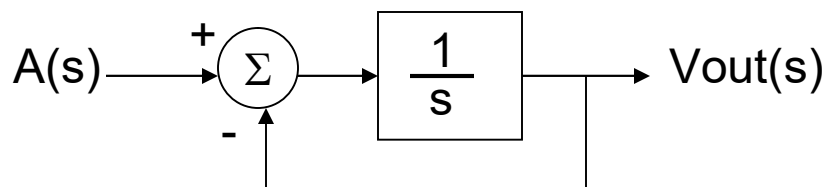
- 1) You decide to attend a rock concert without earplugs. You sit where the sound power level is 109 dB. How long until you have permanent hearing loss?
- 2) At the rock concert in (1), you decide to sit in the back where the sound power level is only 103 dB. How long until you have permanent hearing loss?
- 3) A doubled clamped spring style accelerometer consists of a Si proof mass (500 $\mu\text{m}$  thick and 1mm by 1mm) and a suspension system (2 rectangular beams, one on one side and one on the other side of the PM, 100 $\mu\text{m}$  long, 10 $\mu\text{m}$  wide and 5 $\mu\text{m}$  thick). For a Young's modulus of 190GPa and a density of 2.3g/cm<sup>3</sup>, what is the sensitivity of the accelerometer?
- 4) For an accelerometer with a natural frequency of 1000Hz, what is the proof mass / frame relative displacement for a 10 G acceleration (1G = 9.8 m/s<sup>2</sup>)?
- 5) What is the natural frequency (in Hz) for an accelerometer where a 10 G acceleration (1G = 9.8 m/s<sup>2</sup>) results in a proof mass / frame relative displacement of 10 $\mu\text{m}$ ?
- 6) For  $a(t) = 2u(t)$ , what is  $V_{out}(t)$ ?



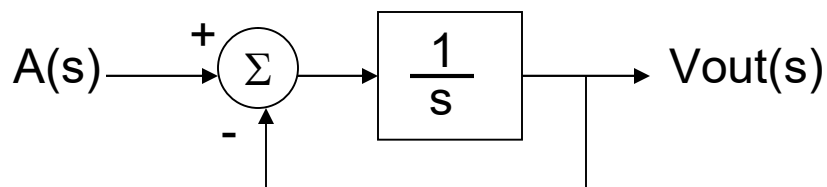
- 1) You decide to attend a rock concert without earplugs. You sit where the sound power level is 109 dB. How long until you have permanent hearing loss?
- 2) At the rock concert in (1), you decide to sit in the back where the sound power level is only 103 dB. How long until you have permanent hearing loss?
- 3) A doubled clamped spring style accelerometer consists of a Si proof mass (500 $\mu\text{m}$  thick and 1mm by 1mm) and a suspension system (2 rectangular beams, one on one side and one on the other side of the PM, 100 $\mu\text{m}$  long, 10 $\mu\text{m}$  wide and 5 $\mu\text{m}$  thick). For a Young's modulus of 190GPa and a density of 2.3g/cm<sup>3</sup>, what is the sensitivity of the accelerometer?
- 4) For an accelerometer with a natural frequency of 1000Hz, what is the proof mass / frame relative displacement for a 10 G acceleration (1G = 9.8 m/s<sup>2</sup>)?
- 5) What is the natural frequency (in Hz) for an accelerometer where a 10 G acceleration (1G = 9.8 m/s<sup>2</sup>) results in a proof mass / frame relative displacement of 10 $\mu\text{m}$ ?
- 6) For  $a(t) = 2u(t)$ , what is  $V_{out}(t)$ ?



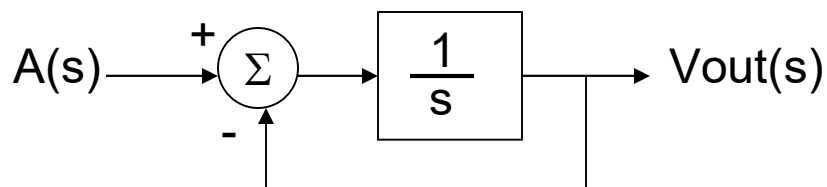
- 1) You decide to attend a rock concert without earplugs. You sit where the sound power level is 109 dB. How long until you have permanent hearing loss?
- 2) At the rock concert in (1), you decide to sit in the back where the sound power level is only 103 dB. How long until you have permanent hearing loss?
- 3) A doubled clamped spring style accelerometer consists of a Si proof mass (500 $\mu\text{m}$  thick and 1mm by 1mm) and a suspension system (2 rectangular beams, one on one side and one on the other side of the PM, 100 $\mu\text{m}$  long, 10 $\mu\text{m}$  wide and 5 $\mu\text{m}$  thick). For a Young's modulus of 190GPa and a density of 2.3g/cm<sup>3</sup>, what is the sensitivity of the accelerometer?
- 4) For an accelerometer with a natural frequency of 1000Hz, what is the proof mass / frame relative displacement for a 10 G acceleration (1G = 9.8 m/s<sup>2</sup>)?
- 5) What is the natural frequency (in Hz) for an accelerometer where a 10 G acceleration (1G = 9.8 m/s<sup>2</sup>) results in a proof mass / frame relative displacement of 10 $\mu\text{m}$ ?
- 6) For  $a(t) = 2u(t)$ , what is  $V_{out}(t)$ ?



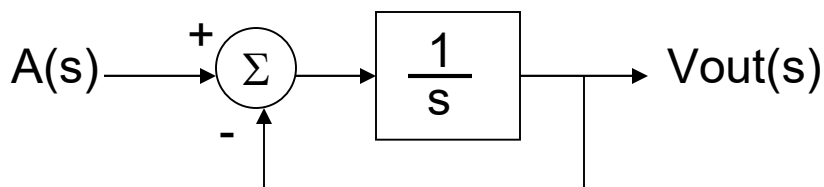
- 1) You decide to attend a rock concert without earplugs. You sit where the sound power level is 109 dB. How long until you have permanent hearing loss?
- 2) At the rock concert in (1), you decide to sit in the back where the sound power level is only 103 dB. How long until you have permanent hearing loss?
- 3) A doubled clamped spring style accelerometer consists of a Si proof mass (500 $\mu\text{m}$  thick and 1mm by 1mm) and a suspension system (2 rectangular beams, one on one side and one on the other side of the PM, 100 $\mu\text{m}$  long, 10 $\mu\text{m}$  wide and 5 $\mu\text{m}$  thick). For a Young's modulus of 190GPa and a density of 2.3g/cm<sup>3</sup>, what is the sensitivity of the accelerometer?
- 4) For an accelerometer with a natural frequency of 1000Hz, what is the proof mass / frame relative displacement for a 10 G acceleration (1G = 9.8 m/s<sup>2</sup>)?
- 5) What is the natural frequency (in Hz) for an accelerometer where a 10 G acceleration (1G = 9.8 m/s<sup>2</sup>) results in a proof mass / frame relative displacement of 10 $\mu\text{m}$ ?
- 6) For  $a(t) = 2u(t)$ , what is  $V_{out}(t)$ ?



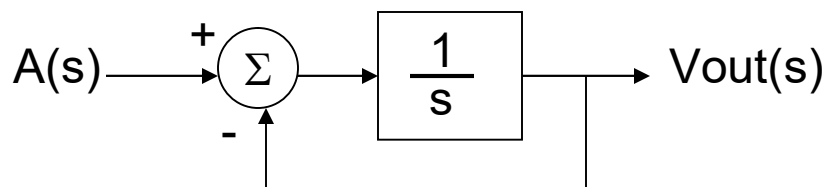
- 1) You decide to attend a rock concert without earplugs. You sit where the sound power level is 109 dB. How long until you have permanent hearing loss?
- 2) At the rock concert in (1), you decide to sit in the back where the sound power level is only 103 dB. How long until you have permanent hearing loss?
- 3) A doubled clamped spring style accelerometer consists of a Si proof mass (500 $\mu\text{m}$  thick and 1mm by 1mm) and a suspension system (2 rectangular beams, one on one side and one on the other side of the PM, 100 $\mu\text{m}$  long, 10 $\mu\text{m}$  wide and 5 $\mu\text{m}$  thick). For a Young's modulus of 190GPa and a density of 2.3g/cm<sup>3</sup>, what is the sensitivity of the accelerometer?
- 4) For an accelerometer with a natural frequency of 1000Hz, what is the proof mass / frame relative displacement for a 10 G acceleration (1G = 9.8 m/s<sup>2</sup>)?
- 5) What is the natural frequency (in Hz) for an accelerometer where a 10 G acceleration (1G = 9.8 m/s<sup>2</sup>) results in a proof mass / frame relative displacement of 10 $\mu\text{m}$ ?
- 6) For  $a(t) = 2u(t)$ , what is  $V_{out}(t)$ ?



- 1) You decide to attend a rock concert without earplugs. You sit where the sound power level is 109 dB. How long until you have permanent hearing loss?
- 2) At the rock concert in (1), you decide to sit in the back where the sound power level is only 103 dB. How long until you have permanent hearing loss?
- 3) A doubled clamped spring style accelerometer consists of a Si proof mass (500 $\mu\text{m}$  thick and 1mm by 1mm) and a suspension system (2 rectangular beams, one on one side and one on the other side of the PM, 100 $\mu\text{m}$  long, 10 $\mu\text{m}$  wide and 5 $\mu\text{m}$  thick). For a Young's modulus of 190GPa and a density of 2.3g/cm<sup>3</sup>, what is the sensitivity of the accelerometer?
- 4) For an accelerometer with a natural frequency of 1000Hz, what is the proof mass / frame relative displacement for a 10 G acceleration (1G = 9.8 m/s<sup>2</sup>)?
- 5) What is the natural frequency (in Hz) for an accelerometer where a 10 G acceleration (1G = 9.8 m/s<sup>2</sup>) results in a proof mass / frame relative displacement of 10 $\mu\text{m}$ ?
- 6) For  $a(t) = 2u(t)$ , what is  $V_{out}(t)$ ?



- 1) You decide to attend a rock concert without earplugs. You sit where the sound power level is 109 dB. How long until you have permanent hearing loss?
- 2) At the rock concert in (1), you decide to sit in the back where the sound power level is only 103 dB. How long until you have permanent hearing loss?
- 3) A doubled clamped spring style accelerometer consists of a Si proof mass (500 $\mu\text{m}$  thick and 1mm by 1mm) and a suspension system (2 rectangular beams, one on one side and one on the other side of the PM, 100 $\mu\text{m}$  long, 10 $\mu\text{m}$  wide and 5 $\mu\text{m}$  thick). For a Young's modulus of 190GPa and a density of 2.3g/cm<sup>3</sup>, what is the sensitivity of the accelerometer?
- 4) For an accelerometer with a natural frequency of 1000Hz, what is the proof mass / frame relative displacement for a 10 G acceleration (1G = 9.8 m/s<sup>2</sup>)?
- 5) What is the natural frequency (in Hz) for an accelerometer where a 10 G acceleration (1G = 9.8 m/s<sup>2</sup>) results in a proof mass / frame relative displacement of 10 $\mu\text{m}$ ?
- 6) For  $a(t) = 2u(t)$ , what is  $V_{out}(t)$ ?





- 1) You decide to attend a rock concert without earplugs. You sit where the sound power level is 109 dB. How long until you have permanent hearing loss?
- 2) At the rock concert in (1), you decide to sit in the back where the sound power level is only 103 dB. How long until you have permanent hearing loss?
- 3) A doubled clamped spring style accelerometer consists of a Si proof mass (500 $\mu\text{m}$  thick and 1mm by 1mm) and a suspension system (2 rectangular beams, one on one side and one on the other side of the PM, 100 $\mu\text{m}$  long, 10 $\mu\text{m}$  wide and 5 $\mu\text{m}$  thick). For a Young's modulus of 190GPa and a density of 2.3g/cm<sup>3</sup>, what is the sensitivity of the accelerometer?
- 4) For an accelerometer with a natural frequency of 1000Hz, what is the proof mass / frame relative displacement for a 10 G acceleration (1G = 9.8 m/s<sup>2</sup>)?
- 5) What is the natural frequency (in Hz) for an accelerometer where a 10 G acceleration (1G = 9.8 m/s<sup>2</sup>) results in a proof mass / frame relative displacement of 10 $\mu\text{m}$ ?
- 6) For  $a(t) = 2u(t)$ , what is  $V_{out}(t)$ ?

