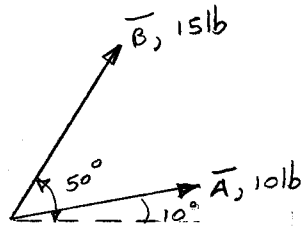
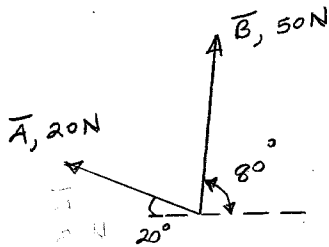


Use the parallelogram rule to determine the Resultant vector, **R**, resulting from the addition of vectors **A** and **B**.

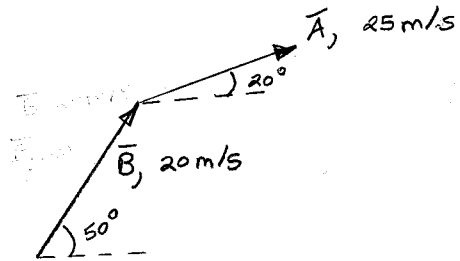
1A.



1B.



1C.



1D.

